

5. Oblicz sposobem pisemnym:

b) $0,48 + 36,8$

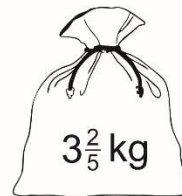
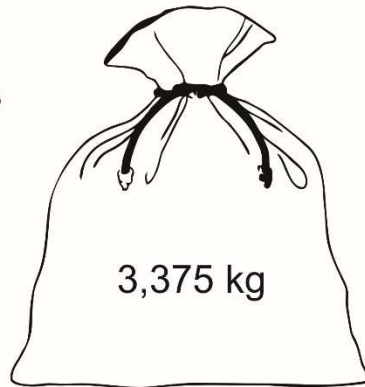
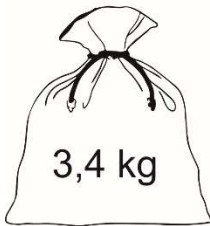
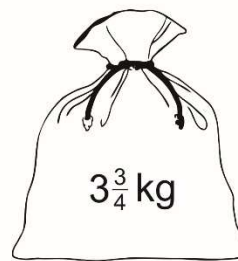
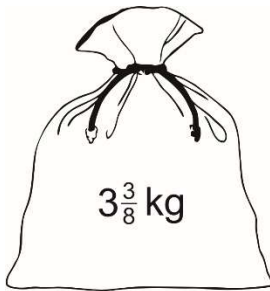
b) $5,1 - 3,253$

c) $6,9 \cdot 3,42$

d) $5,98 : 2,3$



6. Połącz liniami worki o równych masach.



7. Połącz liniami worki o równych masach.

